


# Övningar med notnamn och intervall MG 1

## 1. Skriv in tonerna




A musical staff with a treble clef and a key signature of one flat (B-flat). The notes are: C1, A2, F1, G1, E2, D2, H1, A1, E1, G2, F2, D1. The labels are written below the staff.

## 2. Skriv in tonernas namn och oktav




A musical staff with a treble clef and a key signature of one flat. It starts with a 3-measure rest, followed by notes: C2, D2, E2, F2, G2, A2, B2, C3. The staff ends with a 2/4 time signature.

## 3. Skriv in tonerna




A musical staff with a treble clef and a 2/4 time signature. The notes are: D1, G2, C2, E2, C1, D2, F2, A1, F1, H1, G1, E1. The labels are written below the staff.

## 4. Skriv in tonernas namn och oktav




A musical staff with a treble clef and a key signature of one flat. The notes are: C2, D2, E2, F2, G2, A2, B2, C3, D3, E3, F3, G3, A3, B3, C4.

## 4. Skriv in intervallet




A musical staff with a treble clef and a key signature of one flat. It shows intervals: a 4th interval (C2-G2), a 5th interval (C2-C3), a 6th interval (C2-A2), a 7th interval (C2-B2), and an 8th interval (C2-C3).



A musical staff with a treble clef and a key signature of one flat. It shows intervals: a 4th interval (C2-G2), a 5th interval (C2-C3), a 6th interval (C2-A2), a 7th interval (C2-B2), and an 8th interval (C2-C3).

## 5. Skriv in intervallet



A musical staff with a treble clef and a common time signature. The notes are: C2, D2, E2, F2, G2, A2, B2, C3. Below the staff are labels: 4↑, 5↓, 8↓, 7↓, 2↑, ↑6, 3↓, 6↓.